



Schreibe in m!


25 km = _____ m

11 km = _____ m

6,2 km = _____ m

0,7 km = _____ m

8,3 km = _____ m



Schreibe in km!

15 000 m = _____ km

5 600 m = _____ km

800 m = _____ km

30 m = _____ km

7 m = _____ km



Fülle zum vollen Kilometer auf!


9km 400 m + _____ m = 10 km

820 m + _____ m = 1 km

5km 743 m + _____ m = 6 km

7km 154 m + _____ m = 8 km

756 m + _____ m = 1 km



Zähle zusammen!


$5\text{km } 200\text{m} + 3\text{km } 800\text{m} = \underline{\hspace{2cm}}$

$3\text{km } 650\text{m} + 1100\text{ m} = \underline{\hspace{2cm}}$

$9600\text{ m} + 4\text{km } 200\text{ m} = \underline{\hspace{2cm}}$

$2\text{km } 750\text{ m} + 3\text{km } 240\text{ m} = \underline{\hspace{2cm}}$

$7\text{km } 90\text{ m} + 400\text{ m} = \underline{\hspace{2cm}}$



Ziehe ab!

$9\text{km } 500\text{m} - 3\text{km } 400\text{m} = \underline{\hspace{2cm}}$

$7\text{km } 450\text{m} - 4\text{ km} = \underline{\hspace{2cm}}$

$8\text{km}790\text{ m} - 3000\text{ m} = \underline{\hspace{2cm}}$

$4\text{km } 320\text{ m} - 200\text{ m} = \underline{\hspace{2cm}}$

$8\text{km } 200\text{ m} - 7\text{km } 150\text{ m} = \underline{\hspace{2cm}}$



Vergleiche!

$5,421\text{ km} \quad \text{☁} \quad 50\text{ km } 420\text{ m}$

$0,725\text{ km} \quad \text{☁} \quad 7\text{ km } 25\text{ m}$

$6055\text{ m} \quad \text{☁} \quad 6\text{ km } 5\text{m}$

$160\text{ m} \quad \text{☁} \quad 0,16\text{ km}$

