


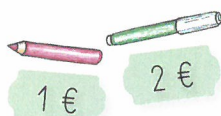

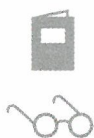
1



Fridolin kauft ein.	Das kostet ... €.	Fridolin bezahlt mit:	Er bekommt ... € zurück.
 9 € 3 €	$9\text{€} + 3\text{€} = \square$		<input type="text"/>
 8 € 7 €	<input type="text"/>		<input type="text"/>
 1 € 2 €	<input type="text"/>		<input type="text"/>
 2 € 7 €	<input type="text"/>		<input type="text"/>

2

Finde eigene Rechengeschichten.



3

= oder \neq

