

Finde die Nachbaraufgaben!

In der Mitte
wird
verdoppelt!


1

$4 + 5 = \underline{\quad}$

$5 + 5 = \underline{\quad}$

$5 + 5 = \underline{\quad}$

$6 + 5 = \underline{\quad}$




2


$7 + 8 = \underline{\quad}$

$8 + 8 = \underline{\quad}$

$8 + 8 = \underline{\quad}$

$6 + 8 = \underline{\quad}$

$7 + 8 = \underline{\quad}$



3


$5 + 9 = \underline{\quad}$

$9 + 9 = \underline{\quad}$

$9 + 9 = \underline{\quad}$

$9 + 9 = \underline{\quad}$

$5 + 9 = \underline{\quad}$





7

$6 + 6 = \underline{\quad}$

$6 + 6 = \underline{\quad}$

$6 + 6 = \underline{\quad}$

$6 + 6 = \underline{\quad}$

5

$7 + 7 = \underline{\quad}$

$7 + 7 = \underline{\quad}$

$7 + 7 = \underline{\quad}$

$7 + 7 = \underline{\quad}$

$7 + 7 = \underline{\quad}$

