


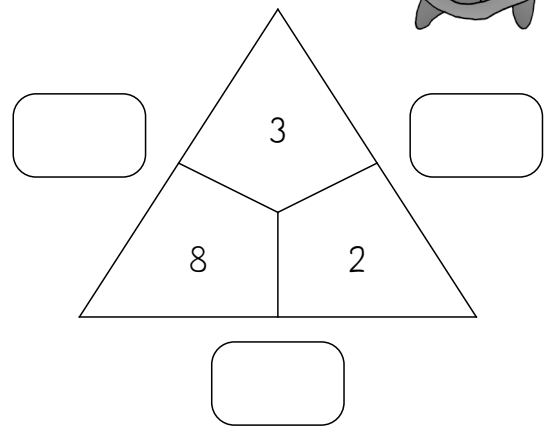
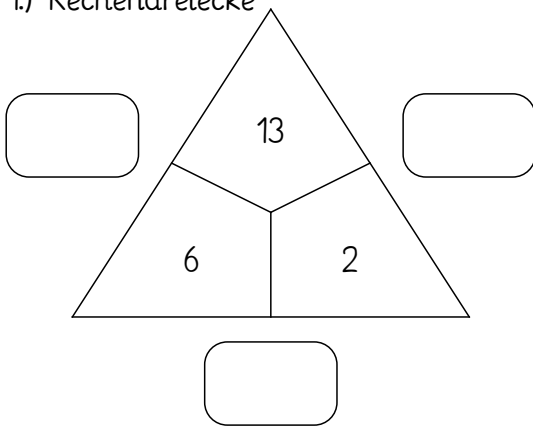
Name \_\_\_\_\_

Klasse: \_\_\_\_\_

## Wir rechnen plus und minus!



### 1.) Rechendreiecke



### 2. Rechne!

$15 - \underline{\quad} = 8$

$5 + \underline{\quad} = 7$

$15 - 9 = \underline{\quad}$

$12 + \underline{\quad} = 20$

$17 - \underline{\quad} = 7$

$\underline{\quad} + 4 = 14$

$\underline{\quad} - 7 = 7$

$\underline{\quad} + 2 = 10$

$\underline{\quad} - 4 = 16$

$5 + 10 = \underline{\quad}$

$17 - 3 = \underline{\quad}$

$13 + \underline{\quad} = 16$

$18 - 18 = \underline{\quad}$

$\underline{\quad} + 3 = 14$

$\underline{\quad} + 8 = 19$

$\underline{\quad} + 1 = 10$

$15 - 12 = \underline{\quad}$

$15 - 13 = \underline{\quad}$

### 3. Rechne aus!

